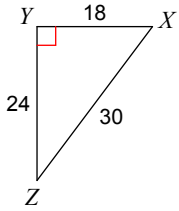


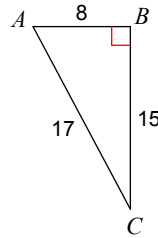
TRIGONOMETRY PRACTICE

Find the value of each trigonometric ratio.

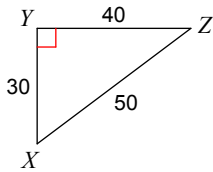
1) $\cos Z$



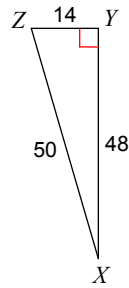
2) $\cos A$



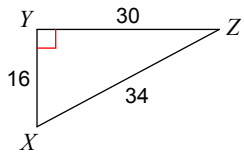
3) $\cos X$



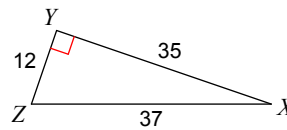
4) $\tan Z$



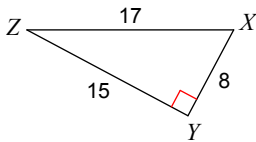
5) $\cos X$



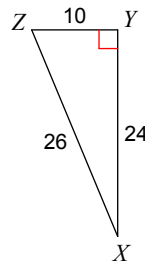
6) $\sin Z$



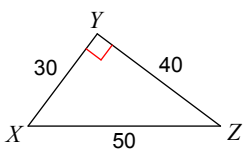
7) $\tan X$



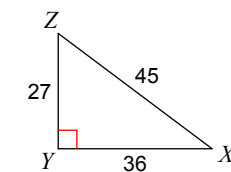
8) $\sin X$



9) $\tan X$

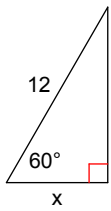


10) $\cos X$

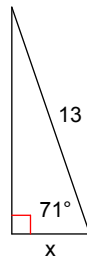


Find the missing side by using SOH-CAH-TOA. Round to the nearest tenth.

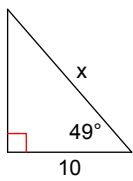
11)



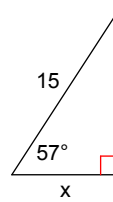
12)



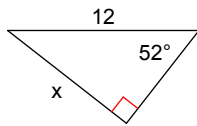
13)



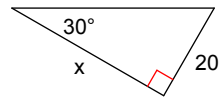
14)



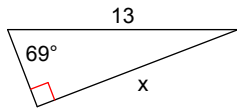
15)



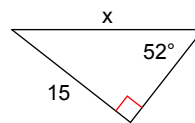
16)



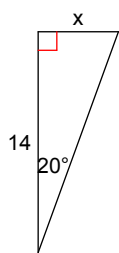
17)



18)



19)



20)

