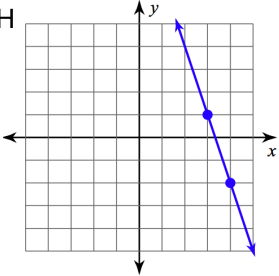


NAME: _____

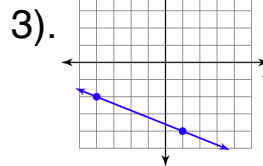
PER: _____

SLOPE PRACTICE

Directions: Represent Slope 4 Ways. (Graph, Table, Pts, Describe)

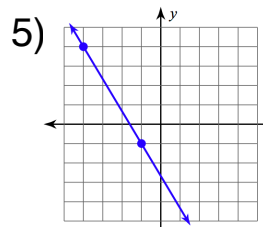
<p>1) TWO POINTS</p>	<p>GRAPH</p> 
<p>TABLE</p>	<p>DESCRIBE</p>

2) $(-7, 7), (-8, 8)$



4)

x	y
0	4
1	6
2	8



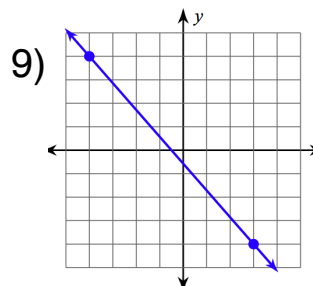
6)

x	1	2	3
y	3	9	27

7) $(8, 5), (4, 2)$

8)

x	-4	3	10
y	-17	4	25



10) $(-4, 5), (7, 7)$