

POINT-SLOPE (GRAPHS/2-POINTS)

Name _____

Period _____

FIND THE SLOPE-INTERCEPT EQUATIONS GIVEN TWO POINTS.

1) $(-16, -4), (-5, -15)$

2) $(-15, -20), (-4, -9)$

3) $(-17, -11), (-10, -4)$

4) $(5, 17), (6, 10)$

5) $(14, 4), (17, 16)$

6) $(6, -1), (9, -13)$

7) $(-13, -7), (-16, 17)$

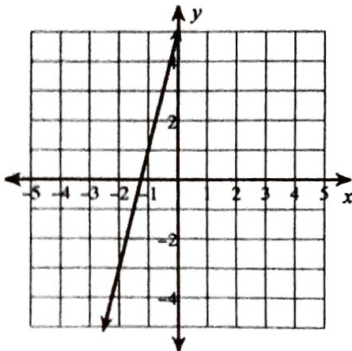
8) $(9, 9), (6, 7)$

9) $(-14, -12), (-19, -12)$

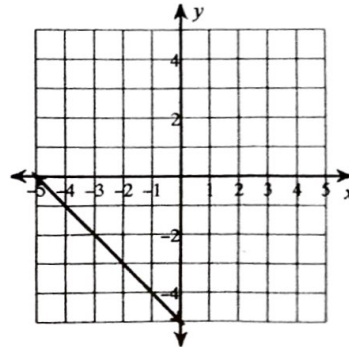
10) $(-16, 17), (-16, 19)$

FIND THE SLOPE-INTERCEPT USING THE GRAPHS. (USE POINT-SLOPE FORM)

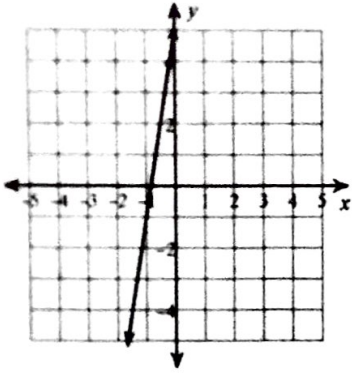
11)



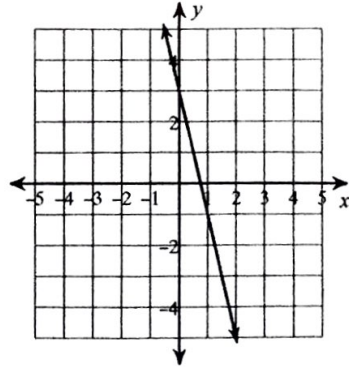
12)



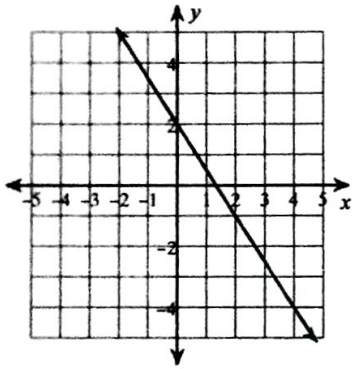
13)



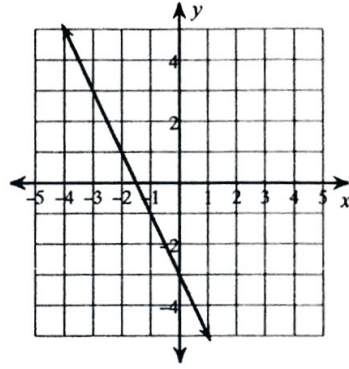
14)



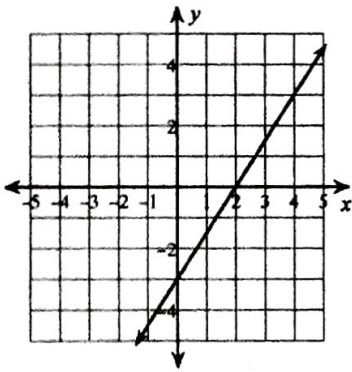
15)



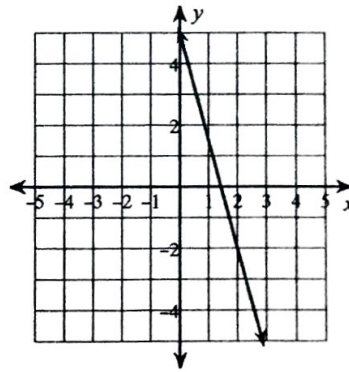
16)



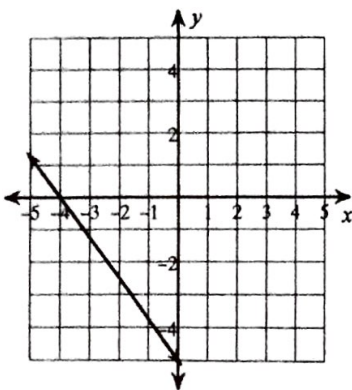
17)



18)



19)



20)

