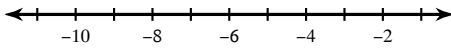


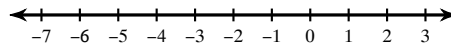
NOTECARD REVIEW

CHOOSE 3 PROBLEMS TO SOLVE & GRAPH.

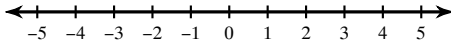
1) $-1 + 5b \leq 4 + 6b$



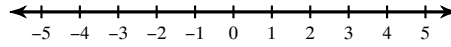
2) $-5v < 1 + v + 5$



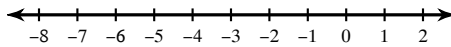
3) $4 + n < 6 + 4n - 2$



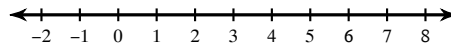
4) $2x - x < 3x + 6$



5) $-4(v + 4) > -15 - 3v$

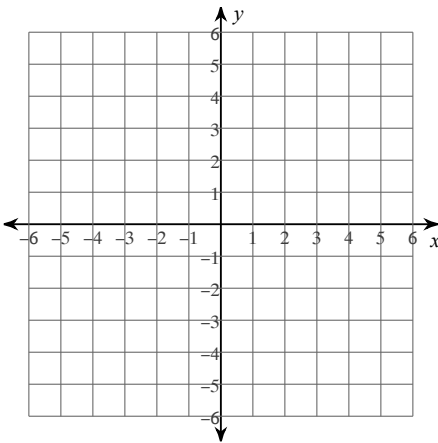


6) $-3(1 + v) - 4v < -19 + v$

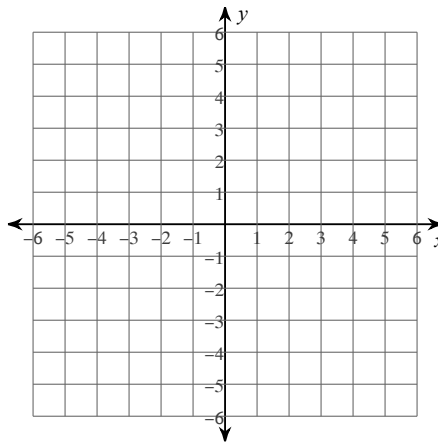


CHOOSE 2 PROBLEMS TO SOLVE & GRAPH.

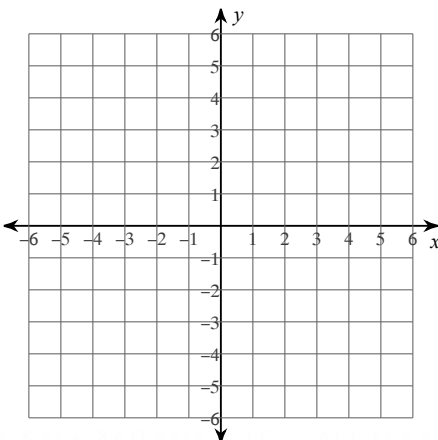
7) $2x - y \leq 3$



8) $3x - 5y > -25$



9) $y > 2x + 5$



10) $y \leq -3x + 3$

