

Finding Slope from Two Points

Date _____ Period _____

Find the slope of the line through each pair of points.

1) $(16, -10), (17, -19)$

2) $(12, 3), (8, -17)$

3) $(0, -9), (-18, 11)$

4) $(-16, -14), (2, -9)$

5) $(3, 9), (3, 1)$

6) $(2, 8), (0, 20)$

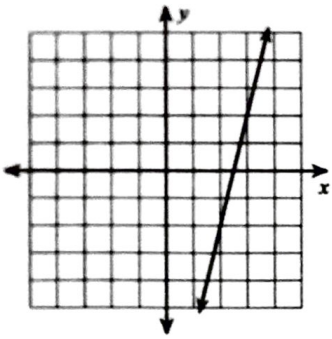
7) $(-3, -18), (-7, 14)$

8) $(-14, -12), (13, 3)$

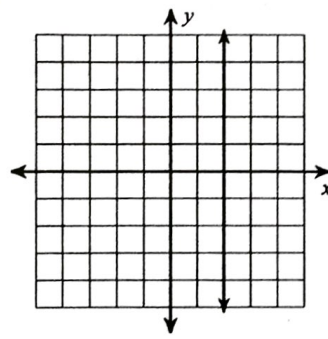
9) $(-10, 16), (4, 8)$

Find the slope of each line.

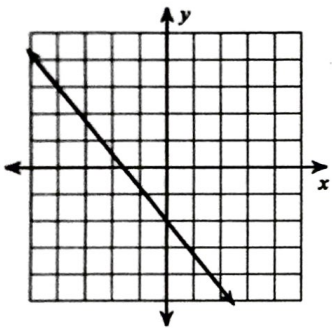
10)



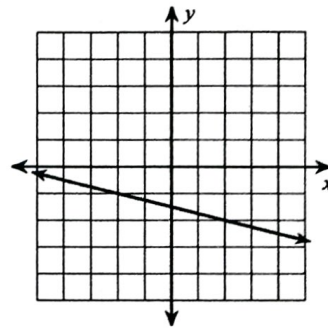
11)



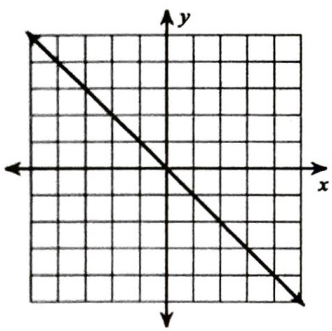
12)



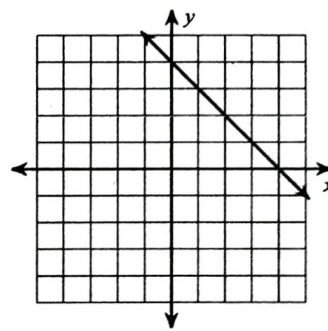
13)



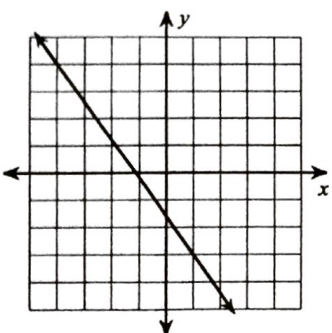
14)



15)



16)



17)

